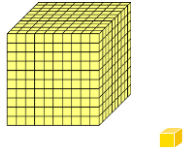
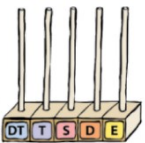
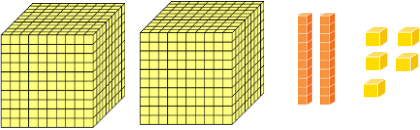
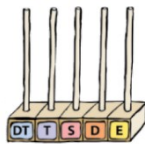
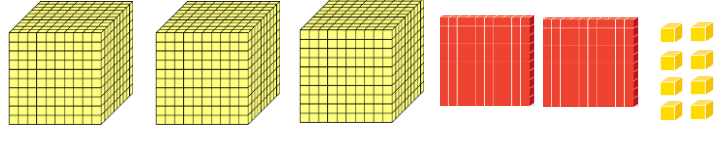
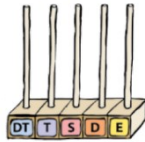
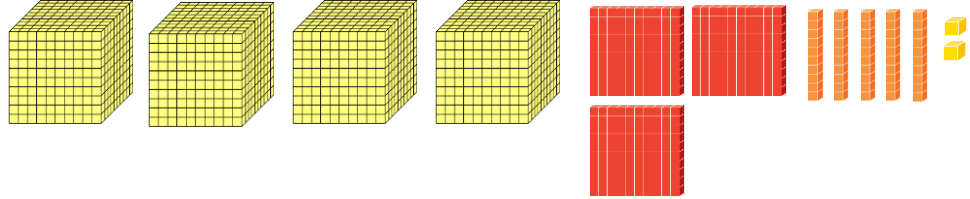
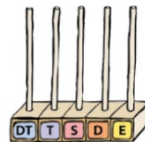


## DO 10.000 PO ENICAH

1. V zvezek napiši zgornji naslov.
2. Zapiši, katera števila so prikazana v tabeli.
  - a) Prvo in drugo število sta že napisana, prepisi njun zapis in nariši pozicijsko računalo (puščica). Dodaj krogce na ustrezna mesta.
  - b) Tretje in četrto število na enak način napiši sam.

	<b>1T 0S 0D 1E = 1 001</b> tisoč ena	
	<b>2T 0S 2D 5E = 2 025</b> dva tisoč petindvajset	
	<b>Napiši sam.</b>	
	<b>Napiši sam.</b>	

3. V zvezek nariši spodnji številski trak. Štej po ena od 990 do 1015. Števila zapiši.

